

1. Work out $46 + 17$ **63**.....
(1 mark)2. Work out $135 - 82$ **53**.....
(1 mark)3. Work out 6×36 **216**.....
(1 mark)4. Work out $115 \div 5$ **23**.....
(1 mark)

5. Round 128 to the nearest 10

130.....
(1 mark)6. Work out $7 - 15$ **-8**.....
(1 mark)7. What is $\frac{1}{4}$ of 16**4**.....
(1 mark)

8. Find 10% of 90

9.....
(1 mark)9. Convert $\frac{1}{10}$ to a decimal**0.25**.....
(1 mark)10. Calculate 5^2 **25**.....
(1 mark)

11. Write down the next two numbers

4, 6, 8, 10, **12, 14**,

(1 mark)

12. Simplify

 $\frac{8}{10}$ **$\frac{4}{5}$**
(1 mark)

Name : Class..... Score.....

13. Simplify $h + h + h + h + h$

$5h$

.....
(1 mark)

14. Simplify $a \times 6$

$6a$

.....
(1 mark)

15. Expand $3(a + 4)$

$3a + 12$

.....
(2 marks)

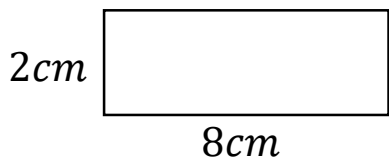
16. Write down all the factors of 6

1×6

2×3

.....
(1 mark)

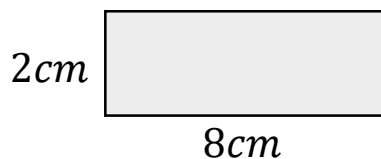
17. Calculate the perimeter



$20cm$

.....
(1 mark)

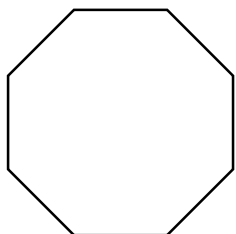
18. Calculate the area



$16cm^2$

.....
(1 mark)

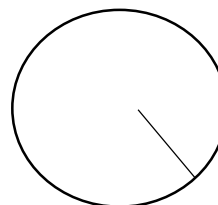
19. Name this shape



$Octagon$

.....
(1 mark)

20. Name this part of a circle



$Radius$

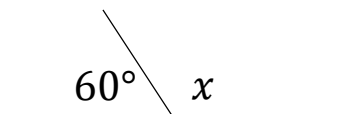
.....
(1 mark)

21. Draw all the lines of symmetry



.....
(1 mark)

22. Calculate x



$x = 120^\circ$

.....
(1 mark)

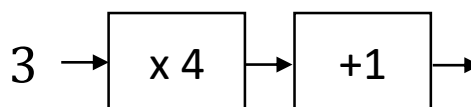
23. Workout

$10 - 2 \times 3$

4

.....
(1 mark)

24. Solve



13

.....
(1 mark)